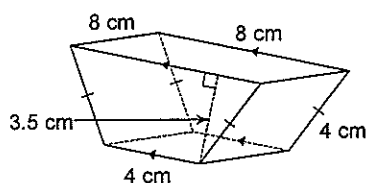


Due Tuesday, April 15th

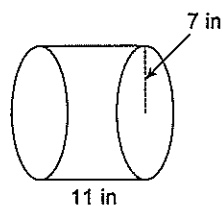
Date \_\_\_\_\_ Period \_\_\_\_\_

Find the volume of each figure. Round your answers to the nearest hundredth, if necessary.

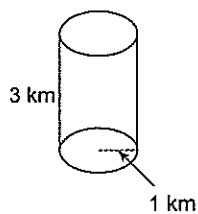
1)



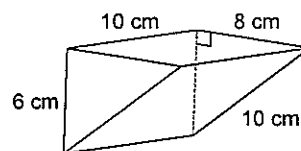
2)



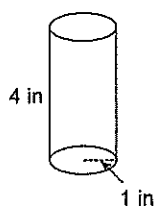
3)



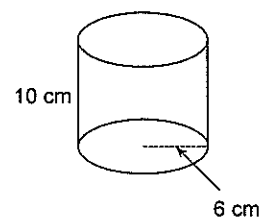
4)



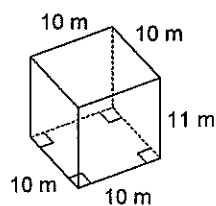
5)



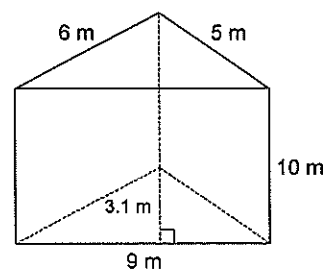
6)



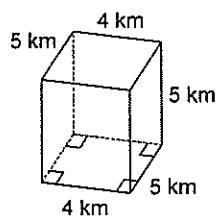
7)



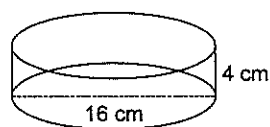
8)



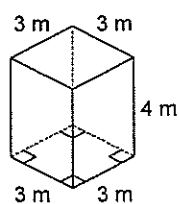
9)



10)



11)



12)

